

ARMY PUBLIC SCHOOL, CHANDIMANDIR
SESSION: 2024-2025
SUMMER HOLIDAYS HOME WORK
CLASS-III



1. Student's must make productive use of their vacation by learning new skills.
2. Eat healthy, stay hydrated and protect themselves from sun stroke.
3. Build the habit of reading.
4. Set up a daily routine

Note: Take the printout of the given worksheets on A4 sheet and Complete it.

ENGLISH
WORKSHEET

Max Marks: 25

Name - _____ Class & Section - _____ Roll no. _____

Q1. Read the passage carefully and answer the questions given below:

Once upon a time in a forest, there was a smart fox named Fanny. The animals were hungry, so they asked Fanny for help. He had a clever idea. He suggested gathering fruits and nuts together before they fell from the trees. The deer reached high branches to gather food, squirrels scurried around, and birds flew to collect food. With teamwork, they got lots of food. Besides gathering food, Fanny also taught them to save the food so that it can be used later. The animals were happy. They learned that working together is important. From that day on, the forest was full of laughter and plenty of joy.

a. Answer the following questions:

i. What did the deer do to help gather food?

ii. What did Fanny teach the animals besides gathering food?

b. Fill in the blanks:

i. With _____, they got lots of food.

ii. The animals were _____, so they asked Fanny for help.

c. Write True or False:

i. The birds didn't help in collecting food. _____

ii. After working together, the animals were sad. _____

Q2. Fill in the blanks with **common nouns**:

- i. The _____ is the tallest land animal.
- ii. We are going to the _____.
- iii. Anu is reading a _____.

Q3. Circle the **proper nouns**:

- i. Aman lives in Patna.
- ii. I am planning to visit ChhatBir Zoo and Rock Garden this summer.
- iii. Anaya wore a new dress on Tuesday.

Q4. Identify the underlined words and tick the **correct option**:

i. There isn't any water in the pot.

- a) countable b) uncountable

ii. Can you give me some biscuits?

- a) countable b) uncountable

iii. There are lots of mosquitoes in the park.

- a) countable b) uncountable

iv. Neha didn't bring her lunch today.

- a) countable b) uncountable

Q5. Write the **types** of the following **sentences**:

i. He is going to the playground. _____

ii. Do you know MrShastri? _____

iii. Oh! This is so lovely. _____

Q6. Rewrite the following sentences by changing the highlighted **nouns** to their **plural** form:

i. The **goose** stared at the **fox**.

ii. I saw a lorry and a big truck parked outside.

iii. The **chef** baked a **dish**.

Q7. Circle the subject and underline the predicate in the following sentences:

- i. The children like cakes and muffins.
- ii. Dia and Sheena are twin sisters.
- iii. The man is reading the newspaper.

Q8. Complete the sentences by changing the **gender** of the words given in the brackets:

- i. Seema's _____ (brother) saw a _____ (tiger).
- ii. My _____ (aunt) and my _____ (nephew) came to visit me.
- iii. The _____ (lioness) chased the _____ (peacock).

1. Revise all the work done in Reader Book, Grammar Book and notebook.

2. Make a project on **Let's Remember Our Brave Soldiers**. The instructions for the project are as follows:



i) Collect information about any TWO soldiers from the names given below.

- Lt Col A B Tarapore
- NaikJadunath Singh
- Lt ArunKhetarpal
- Lt Triveni Singh

ii) Take a printout of the given format on A4 sheet.

iii) Paste photo of the soldiers and write the required information about them in the given columns.

ENGLISH PROJECT - LET'S REMEMBER OUR BRAVE SOLDIERS




NAME	
DATE OF BIRTH	
DATE OF DEATH	
UNIT/REGIMENT	
AWARDS	
OPERATION	

NAME	
DATE OF BIRTH	
DATE OF DEATH	
UNIT/REGIMENT	
AWARDS	
OPERATION	

प्रश्न 1. नीचे दिए गए चित्र को ध्यान से देखें व शब्दों की सहायता से चित्र वर्णन करें:-

पार्क, झूले, तितलियाँ, बच्चे, सूरज, बिल्ली



प्रश्न 2. उचित विकल्प पर सही का निशान लगाओ -

क) कवि का सही स्त्रीलिंग रूप क्या है?

(i) कवियत्री (ii) कविता (iii) कवित्री

ख) राजा का सही स्त्रीलिंग रूप क्या है?

(i) राजी (ii) महारानी (iii) रानी

ग) पत्नी का सही पुल्लिंग रूप क्या है?

प्रश्न 3. खाली स्थान भरें-











क) देश की सबसे अधिक बोली जानेवाली भाषा _____ है।

ख) वर्णों को मिलाकर _____ बनते है।






प्रश्न 4. सही विपरीत अर्थ वाले शब्द पर रंग भरें-

	शब्द			
क)	रात -	शाम	दिन	सुबह
ख)	मित्र -	शत्रु	दोस्त	दयालु
ग)	नया -	नवीन	सुंदर	पुराना
घ)	सुख -	दुष्ट	दुख	अंत
ङ)	काला -	सफ़ेद	लाल	पीला

प्रश्न 5. निम्नलिखित शब्दों के वचन बदलें-

		एकवचन		बहुवचन
क)		केला		
ख)		छाता		
ग)		आँख		
घ)		घंटी		
ङ)		चिड़िया		

प्रश्न 6. चित्र और शब्द को जोड़कर नया शब्द बनाएँ-

क)		+	दान	=	
ख)		+	मुखी	=	
ग)	रसोई	+		=	
घ)	हवाई	+		=	
ड)		+	घर	=	

ART

Complete page number -3 to 13 and page number 29,38 in art and craft book and make any one best out of waste craft activity.

Name: _____

Class: _____

Q1. What is seven hundreds plus thirteen tens is _____

- a) 713 b) 7130 c) 731 d) 830

Q2. One hundred more than 5346 is _____

- a) 4446 b) 5646 c) 5446 d) 5746

Q3. There are 32 students in section A, 40 students in section B and 72 students in section C. How many students are there altogether in the three sections?

- a) 72 b) 104 c) 112 d) 144

Q4. Which digit should come in place of \square , so that the following addition is

$$\begin{array}{r} 5 \square \\ + 38 \\ \hline 92 \end{array}$$

correct?

- a) 4 b) 3 c) 2 d) 1

Q5. If we add 9 tens, 5 hundreds, 7 thousands and 3 ones, then the result is _____

- a) 3795 b) 7539 c) 7593 d) 9573

Q6. What numeral means the same as $800 - 6$? _____

- a) 860 b) 806 c) 794 d) 608

Q7. What number is 10 less than 2305? _____

- a) 2315 b) 3285 c) 2295 d) 2205

Q8. One hundred less than 5946 is _____

- a) 4846 b) 5846 c) 5567 d) 5830

Q9. 17 less than 71 is _____

- a) 54 b) 88 c) 11 d) 9

Q10. 6 tens -4 is equal to _____

- a) 64 b) 56 c) 614 d) 640

Q11. Place value and face value of 8 in 2489 is _____

Q12. Calculate $5375 + 3226$ is _____

- a) 8601 b) 8061 c) 8016 d) 8018

Q13. Which of the following number has 3 in tens place?

- a) 3323 b) 3984 c) 5438 d) 9543

Q14. The next number in the series 2200, 2205, 2210, 2215, is:

- a) 2250 b) 2240 c) 2230 d) 2220

Q15. The expanded form of 7908 is:

- a) $7000 + 98$ b) $7 + 8 + 9$ c) $7000 + 900 + 8$ d) $79 + 8$

Q16. The predecessor of 1000 is:

- a) 999 b) 1001 c) 100 d) 10

Q17. Which number is 1 less than 5400?

- a) 5499 b) 5599 c) 5300 d) 5399

Q18. Successor of 3509 is _____

- a) 3519 b) 3508 c) 3510 d) 3511

Q19. Smallest 4- digit numbers formed from 5, 0, 8 and 3 is _____

- a) 3058 b) 3580 c) 5380 d) 3508

Q20. The short form of $9000 + 90$ is _____

- a) 9900 b) 9009 c) 9090 d) 9099

Q21. Complete the pattern using skip of 100's – 3799, 3899, 3999, _____, _____.

Q22. Fill with roman numeral: $IV + \underline{\hspace{1cm}} = IX$

Q23. Fill with roman numeral: $15 - 9 = \underline{\hspace{1cm}}$

Q24. Fill with roman numeral: $20 - 14 = \underline{\hspace{1cm}}$

Q25. Fill with roman numeral: $XII - V = \underline{\hspace{1cm}}$

Name _____ Roll-no _____ Class & Section _____

Q 1. Choose and write the correct option:

Parents and their children form an

- i. immediate family ii. extended family iii. joint family

b. A diagram that shows relation of people with each other in a family is called

- i. family ii. family tree iii. nuclear family

c. Shrubs are the bushy plants, which have

- i. thin woody stems ii. weak stems iii. thick woody stems

d. Green leaves prepare their own food in the presence of

- i. factory ii. consumers iii. sunlight

e. People in villages use the dried leaves of _____ to make leaf plates (pattal) and bowls (dona)

- i. Pine ii. Dhak iii. Tulsi

Q 2. Fill in the blanks:

- a. Old people require more _____ and support.
b. Aquatic plants live and grow in _____.
c. There are many _____ plants which did not grow earlier in India.
d. Children who do not have parents are called _____.
e. Photo means light and _____ means putting together.

Q 3. Write True or False:

- a. We should pluck flowers from the plants.
b. People related to us through our father are called maternal relatives.
c. People in South India use banana leaves as plates.
d. People with special needs, need our care, support and encouragement.
e. Leaves are collectively known as foliage .

Q 4. Match the following:

- | | |
|----------------------|--------------------------------|
| a. Good values | facial feature |
| b. Hereditary traits | being truthful |
| c. Thick woody stem | thin and weak stems |
| d. Climbers | midrib |
| e. Long tube | like structure of a leaf trunk |

Q 5. Draw and label the following diagrams:

- a. Parts of a leaf
- b.
 - i herb
 - ii shrub
 - iii creeper(One each)

COMPUTER WORKSHEET

Q1: Label the given screen correctly:

The image shows a Windows 8 desktop environment with several components highlighted by yellow boxes and red arrows. The components are:

- Mouse Pointer (top right)
- Desktop icon (top left)
- start menu (left side)
- Desktop screen (background)
- Taskbar (bottom)
- start button (bottom left)
- search box (bottom left)
- Taskbar icons (bottom)
- Time and Date (bottom right)
- Notification Area (bottom right)

Below the image, the following labels are provided:

Mouse Pointer Desktop icon start menu Desktop screen
Taskbar start button search box Taskbar icons Time and Date
Notification Area

Q2. Match the following:



PEN DRIVE



KEYBOARD



PEN DRIVE

DRAWINGFORALL.NET



SCANNER



SPEAKER



PRINTER



MOUSE

DRAWINGFORALL.NET



HARDDISK



MONITOR



JOYSTICK